

1. $(3 \times 10^4) + (2 \times 10^2) + (4 \times 10) =$

- A. 302400
- B. 32400
- C. 30240
- D. 3240
- E. 324

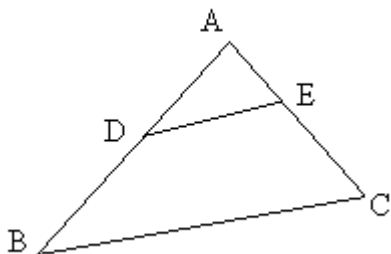
2. Andy solves problems 74 to 125 inclusive in a Math exercise. How many problems does he solve?

- A. 53
- B. 52
- C. 51
- D. 50
- E. 49

3. If x and y are integers, and $3x + 2y = 13$, which of the following could be the value of y ?

Select ALL values that apply.

- B. 1
- C. 2
- D. 3



4. In triangle ABC, $AD = DB$, DE is parallel to BC , and the area of triangle ABC is 40. What is the area of triangle ADE ?

- A. 10
- B. 15
- C. 20
- D. 30
- E. it cannot be determined from the information given

5. If $n > 0$, which of the following must be true?

Select ALL that apply.

- A. $n^2 > 1$
- B. $n - n^2 < 0$
- C. $2n - 1 > 0$
- D. $2n^3 > 0$

<u>A</u>	<u>B</u>
2	5
3	10
4	17
5	26

6. Which of the following describes the relationship between A and B as shown in the pairs of numbers in the table above?

- A. $B = A + 4$
- B. $B = 2A + 1$
- C. $B = 3A - 1$
- D. $B = A^2 + 1$
- E. $B = A^2 - 1$

7. 6 people meet for a business lunch. Each person shakes hands once with each other person present. How many handshakes take place?

- A. 30
- B. 21
- C. 18
- D. 15
- E. 10

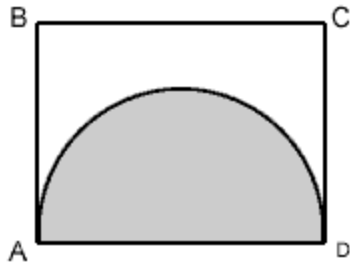
8. If $x^2 - y^2 = 55$, and $x - y = 11$, then $y =$

- A. 8
- B. 5
- C. 3
- D. -8
- E. -3

9. In a sports club with 30 members, 17 play badminton and 19 play tennis and 2 do not play either. How many members play both badminton and tennis?

- A. 7
- B. 8
- C. 9

- D. 10
- E. 11



(figure not to scale)

10. Rectangle ABCD has a perimeter of 26. The half circle with diameter AD has an area of 8π . What is the perimeter of the part of the figure that is not shaded?

- A. $26 + 4\pi$
- B. $18 + 8\pi$
- C. $18 + 4\pi$
- D. $14 + 4\pi$
- E. $14 + 2\pi$

Answer Key

1. $(3 \times 104) + (2 \times 10^2) + (4 \times 10) =$

- A. 302400
- B. 32400
- C. 30240
- D. 3240
- E. 324

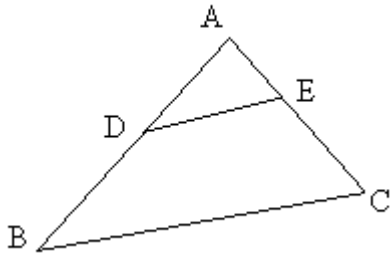
2. Andy solves problems 74 to 125 inclusive in a Math exercise. How many problems does he solve?

- A. 53
- B. 52
- C. 51
- D. 50
- E. 49

3. If x and y are integers, and $3x + 2y = 13$, which of the following could be the value of y ?

Select ALL values that apply.

- B. 1
- C. 2
- D. 3



4. In triangle ABC, $AD = DB$, DE is parallel to BC, and the area of triangle ABC is 40. What is the area of triangle ADE ?

- A. 10
- B. 15
- C. 20
- D. 30
- E. it cannot be determined from the information given

5. If $n > 0$, which of the following must be true?

Select ALL that apply.

- A. $n^2 > 1$
- B. $n - n^2 < 0$
- C. $2n - 1 > 0$
- D. $2n^3 > 0$

<u>A</u>	<u>B</u>
2	5
3	10
4	17
5	26

6. Which of the following describes the relationship between A and B as shown in the pairs of numbers in the table above?

- A. $B = A + 4$
- B. $B = 2A + 1$

- C. $B = 3A - 1$
- D. $B = A^2 + 1$
- E. $B = A^2 - 1$

7. 6 people meet for a business lunch. Each person shakes hands once with each other person present. How many handshakes take place?

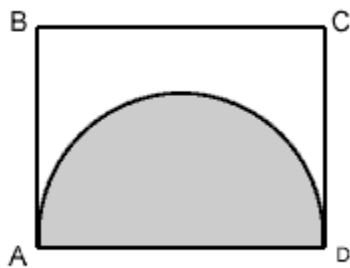
- A. 30
- B. 21
- C. 18
- D. 15
- E. 10

8. If $x^2 - y^2 = 55$, and $x - y = 11$, then $y =$

- A. 8
- B. 5
- C. 3
- D. -8
- E. -3

9. In a sports club with 30 members, 17 play badminton and 19 play tennis and 2 do not play either. How many members play both badminton and tennis?

- A. 7
- B. 8
- C. 9
- D. 10
- E. 11



(figure not to scale)

10. Rectangle ABCD has a perimeter of 26. The half circle with diameter AD has an area of 8π . What is the perimeter of the part of the figure that is not shaded?

- A. $26 + 4\pi$
- B. $18 + 8\pi$
- C. $18 + 4\pi$
- D. $14 + 4\pi$
- E. $14 + 2\pi$

Answer Key

1. $(3 \times 10^4) + (2 \times 10^2) + (4 \times 10) =$

- A. 302400
- B. 32400
- C. 30240
- D. 3240
- E. 324

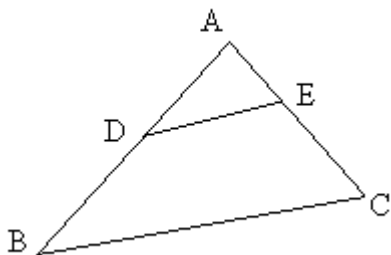
2. Andy solves problems 74 to 125 inclusive in a Math exercise. How many problems does he solve?

- A. 53
- B. 52
- C. 51
- D. 50
- E. 49

3. If x and y are integers, and $3x + 2y = 13$, which of the following could be the value of y ?

Select ALL values that apply.

- B. 1
- C. 2
- D. 3



4. In triangle ABC, $AD = DB$, DE is parallel to BC, and the area of triangle ABC is 40. What is the area of triangle ADE ?

- A. 10
- B. 15
- C. 20
- D. 30
- E. it cannot be determined from the information given

5. If $n > 0$, which of the following must be true?

Select ALL that apply.

- A. $n^2 > 1$
- B. $n - n^2 < 0$
- C. $2n - 1 > 0$
- D. $2n^3 > 0$

<u>A</u>	<u>B</u>
2	5
3	10
4	17
5	26

6. Which of the following describes the relationship between A and B as shown in the pairs of numbers in the table above?

- A. $B = A + 4$
- B. $B = 2A + 1$
- C. $B = 3A - 1$
- D. $B = A^2 + 1$
- E. $B = A^2 - 1$

7. 6 people meet for a business lunch. Each person shakes hands once with each other person present. How many handshakes take place?

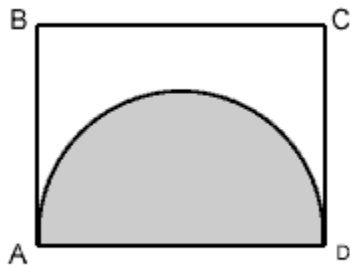
- A. 30
- B. 21
- C. 18
- D. 15
- E. 10

8. If $x^2 - y^2 = 55$, and $x - y = 11$, then $y =$

- A. 8
- B. 5
- C. 3
- D. -8
- E. -3

9. In a sports club with 30 members, 17 play badminton and 19 play tennis and 2 do not play either. How many members play both badminton and tennis?

- A. 7
- B. 8
- C. 9
- D. 10
- E. 11



(figure not to scale)

10. Rectangle ABCD has a perimeter of 26. The half circle with diameter AD has an area of 8π . What is the perimeter of the part of the figure that is not shaded?

- A. $26 + 4\pi$
- B. $18 + 8\pi$
- C. $18 + 4\pi$
- D. $14 + 4\pi$
- E. $14 + 2\pi$

Answer Key

1. C
2. B
3. C
4. A

- 5. D
- 6. D
- 7. D
- 8. E
- 9. B
- 10. C